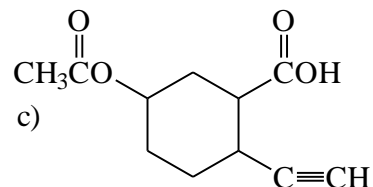
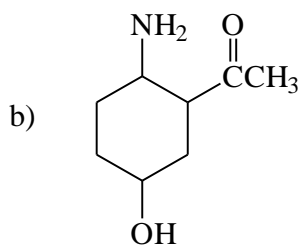
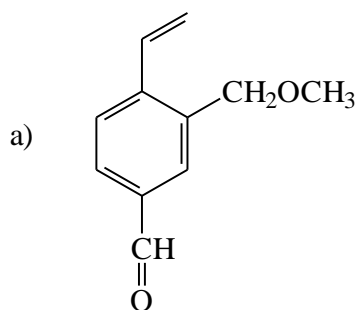
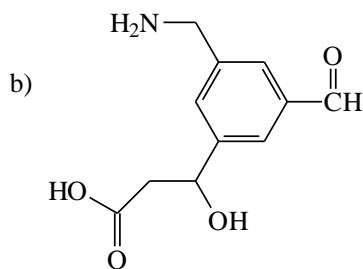
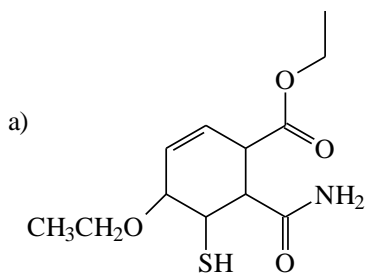


Identification of Functional Groups

1.(10) Identify and name the functional groups in the following molecules:



2.(10) Identify and name (e.g. ketone, ester) the functional groups (there are 10) in the following molecules:



3.(10) Identify and name the 10 (total) functional groups in the following compounds:

