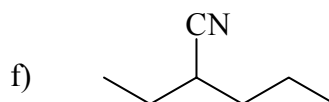
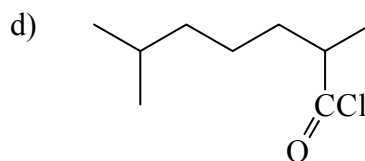
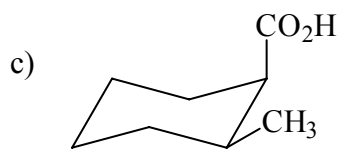
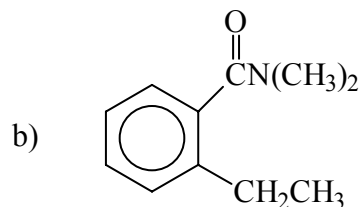
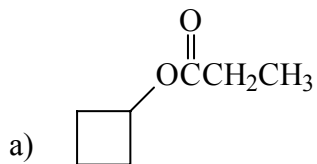


Acid Derivatives

Nomenclature

Name the following:



Draw the following:

a) 3-methylbutyl 2-cyclohexenecarboxylate

b) γ -(*p*-methylbenzyl)caprylamide

c) diethyl succinate

d) (*Z*) 2-benzyl-3-trichloromethyl-5-octenoyl chloride