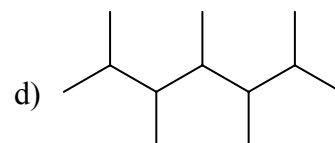
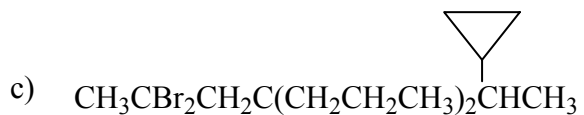
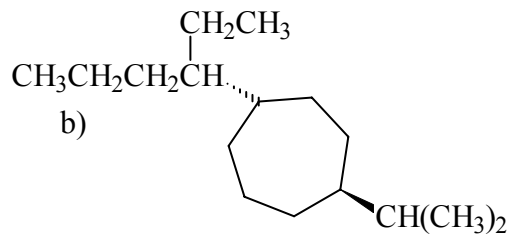
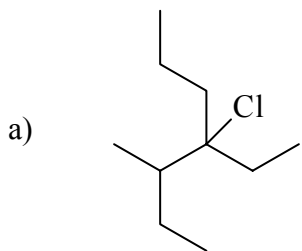


CHEM 241-601
Nomenclature problems

Give the name of each of the following compounds:



Give the names of the following compounds using I.U.P.A.C. nomenclature:

